

Triangles Formative Assignments

Subjective Questions

1. Let ABC and PQR are two triangles.

Which cases the triangles will be congruent? Write down the congruence equation

- a) $AB = PQ$, $BC = QR$ and $AC = PR$
- b) $BC = QR$, $\angle B = \angle Q$, $\angle C = \angle R$
- c) $AB = PQ$, $BC = QR$, $\angle C = \angle P$
- d) $AB = PQ$, $BC = QR$, $\angle B = \angle Q$
- e) $AB = PQ$, $\angle A = \angle P$, $\angle C = \angle R$
- f) $AB = PQ$, $BC = QR$
- g) $\angle B = \angle Q$, $\angle C = \angle R$
- h) $\angle A = \angle P$, $\angle B = \angle Q$, $\angle C = \angle R$
- i) $AB = PR$, $\angle A = \angle P$, $\angle B = \angle R$

Solution

a) The three sides are equal to corresponding three sides. From SSS congruence, ABC is congruent to PQR

$$ABC \cong PQR$$

b) Two angles and included side are equal, so from ASA congruence, ABC is congruent to PQR

$$ABC \cong PQR$$

c) Two sides are equal but the angle is not the included, So ABC is not congruent to PQR

d) Two sides are equal and included angle is equal so from SAS congruence, ABC is congruent to PQR

$$ABC \cong PQR$$

e) Two angles and included side are equal, so from ASA congruence, ABC is congruent to PQR

This material is created by <http://physicscatalyst.com/> and is for your personal and non-commercial use only.

$$ABC \cong PQR$$

- f) Just two sides are equal; So ABC is not congruent to PQR
- g) Just two angles are equal, there is no information about side, and So ABC is not congruent to PQR
- h) All the angles are equal. This does not satisfy any congruence theorem, So ABC is not congruent to PQR
- i) Two sides are equal and included angle is equal so from SAS congruence, ABC is congruent to PRQ

$$ABC \cong PRQ$$

True or False statement

2) True or False statement

- a) We cannot construct a triangle of side 9, 5, 4 cm
- b) In a Right angle triangle, hypotenuse is the longest side
- c) Centroid is the point of intersection of the median of the triangles
- d) A triangle can have two obtuse angles
- e) Orthocenter is the point of intersection of altitudes
- f) If $ABC \cong PQR$ then $AC=PQ$
- g) If a triangle ABC such that $AB > BC$, Then $\angle C > \angle A$
- h) Midpoint of the hypotenuse of right angled triangle is circumcenter

Solution

- a) True
- b) True
- c) True
- d) False
- e) True
- f) False
- g) True
- h) True

Multiple choice Questions

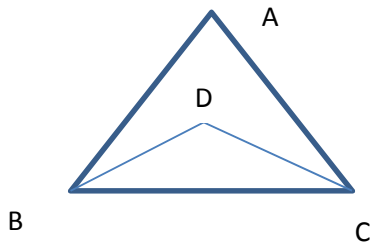
- 4) In a triangle ABC, $\angle A = 60^\circ$ $\angle B = 40^\circ$, which side is the longest

- a) AB
- b) BC
- c) AC

Solution (a)

As $\angle C = 80$ is the highest angle

5. In triangle ABC , $AB=AC$ and D is the point inside triangle such that $BD=DC$ as shown in figure



Which of the following is true?

- a) $\triangle ABD \cong \triangle ACD$
- b) $\angle ABD = \angle ACD$
- c) $\angle DAC = \angle DAB$
- d) All the above

Solution

In triangle ABD and ACD

$AB=AC$

$BD=DC$

AD is common

So $\triangle ABD \cong \triangle ACD$

So all the above are true

6) An exterior angle of the triangle is 110° , one of the opposite interior angle is 50° .

What are the other two angles

- a) $60^\circ, 70^\circ$
- b) $55^\circ, 55^\circ$
- c) $70^\circ, 50^\circ$
- d) None of the above

Solution (a)

Sum of the opposite two interior angle =Exterior angle

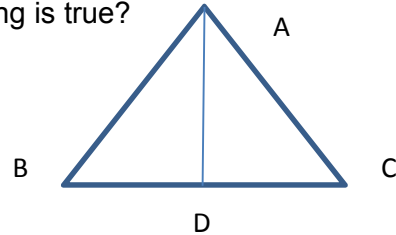
$$50+x=110 \Rightarrow x=60$$

$$\text{Now } 60+50+z=180$$

$$z=70$$

7) AD is the median of the triangle . Which of the following is true?

- a) $AB+BC+AC > 2AD$
- b) $AB +BC > AC$
- c) $AB+BC+AC > AD$
- d) None of these



Solution a and b

In triangle ADB

$$AB +BD > AD$$

In triangle ADC

$$AC+DC > AD$$

Adding both

$$AB+AC +BD+DC > 2AD$$

$$\text{Now } BD+DC=BC$$

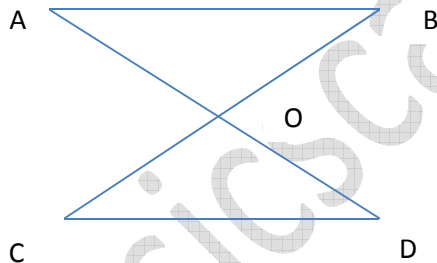
So

$$AB +AC+BC > 2AD$$

Also in triangle ABC

$$AB+BC > AC$$

8)



In the above figure $AB \parallel CD$,O is the midpoint BC. Which of the following is true?

- a) $\Delta AOB \cong \Delta DOC$
- b) O is the midpoint of AD
- c) $AB=CD$
- d) All the above

Solution (d)

In ΔAOB and ΔDOC

$$\angle OAB = \angle ODC$$

$$\angle OBA = \angle OCD$$

OB and OC

So from AAS congruence ,we have

$$\Delta AOB \cong \Delta DOC$$

Now from CPCT ,we have

$$AB=CD$$

OA=OD

9) In an isosceles triangle $\triangle ABC$ with $AB = AC$. D is midpoint on BC. Which of the following is true?

- a) Orthocenter lies on line AD
- b) AD is the perpendicular bisector BC
- c) Centroid lies on the line AD
- d) AD is the bisector of angle A

Solution (a) (b) (c) (d)

10) PQR is a right angle triangle in with $P=90^\circ$ and $PQ=PR$. What is the value of Q and R

- a) $45^\circ, 45^\circ$
- b) $30^\circ, 60^\circ$
- c) 20,60

Solution (a)

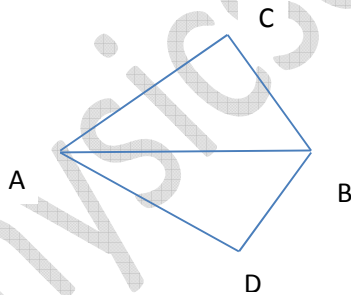
$P=90$

Since $PQ=PR$

$\angle Q = \angle R$

So $Q=R=45^\circ$

11)



In the above quadrilateral ACBD, we have $AC=AD$ and AB bisect the $\angle A$. Which of the following is true?

- a) $\triangle ABC \cong \triangle ABD$
- b) $BC=BD$
- c) $\angle C = \angle D$
- d) None of the above

Solution (a) ,(b) ,(c)

In triangle ABC and ABD ,we have

This material is created by <http://physicscatalyst.com/> and is for your personal and non-commercial use only.

$$AC=AD$$

$$\angle CAB = \angle BAD$$

$$AB=AB$$

By SAS ,we have

$$\triangle ABC \cong \triangle ABD$$

Now we have $BC=BD$ and $\angle C = \angle D$

Match the column

Point of intersection of altitude	Circumcenter
Point of intersection of Median	In center
Point of intersection of angle bisector	Orthocenter
Point of intersection of perpendicular bisector of sides	Centroid